

Pupil's Assessment Number:.....

THE UNITED REPUBLIC OF TANZANIA
THE NATIONAL EXAMINATIONAL COUNCIL OF TANZANIA
STANDARD FOUR NATIONAL ASSESSMENT

04E

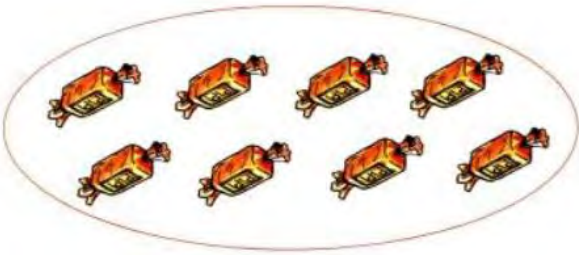
MATHEMATICS

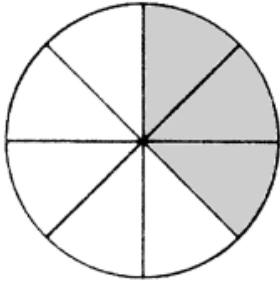
Time: 1:30 Hours

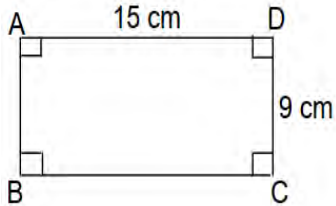
Year: 2015.



Instructions

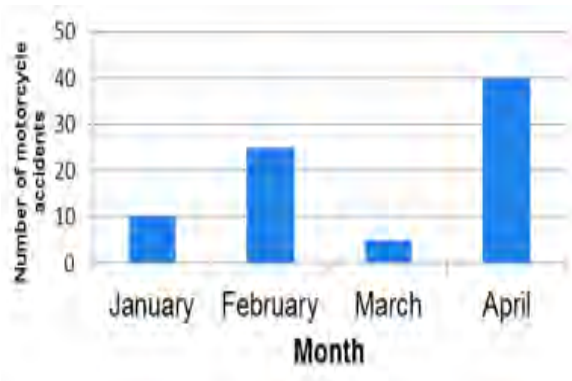
1. This paper consists of **twenty five (25)** questions.
2. Answer **all** questions.

No.	Question	Working space	Answer
1.	<p>Write the number of sweets in the following diagram:</p> 		
2.	Write “five thousand seven hundred and forty nine” in figures		
3.	$72 + 16 =$		
4.	$3566 - 2285 =$		
5.	$\begin{array}{r} 115 \\ \times \quad 6 \\ \hline \\ \hline \end{array}$		
6.	<p>Divide; $8 \overline{) 456}$</p>		

No.	Question	Working space	Answer
7.	The book has 125 pages. How many pages are there in 150 books of that kind?		
8.	Victoria shared a loaf with her three friends. If, everyone got an equal piece, what fraction of the loaf was given to each of them?		
9.	What fraction is shaded in following figure? 		
10.	$\frac{3}{10} + \frac{5}{10} =$		
11.	$\frac{5}{9} - \frac{2}{9} =$		

No.	Question	Working space	Answer
12.	How many 500 shillings notes are there in a note of 10,000 shillings?		
13.	7,425 shillings + 255 shillings =		
14.	Joyce bought the following items at the market: 7 oranges @ sh. 200.00, 8 bananas @ sh. 250.00, 9 mangoes @ sh. 500.00. How much money did she spend?		
15.	Find the perimeter of the rectangle ABCD 		
16.	Shaame has a square shaped farm. If one side has a length of 50 m. Find the perimeter of the farm.		

No.	Question	Working space	Answer															
17.	Find the area of the following rectangle: <div></div>																	
18.	Tabora Airport is 600 m long and 100 m wide. Find its area in hectares.																	
19.	Write down the time shown on the following clock: <div></div>																	
20.	Asha bought 3 kg of rice. How many grams of rice did she buy?																	
21.	Add; <div><table><tr><td></td><td>Hours</td><td>Minutes</td></tr><tr><td></td><td>5</td><td>25</td></tr><tr><td>+</td><td>2</td><td>15</td></tr><tr><td colspan="3"><hr/></td></tr><tr><td colspan="3"><hr/></td></tr></table></div>		Hours	Minutes		5	25	+	2	15	<hr/>			<hr/>				
	Hours	Minutes																
	5	25																
+	2	15																
<hr/>																		
<hr/>																		
22.	Mwanaidi travelled by UDA bus service for 1 hour and 10 minutes and then walked for 1 hour and 15 minutes. How long did she travel?																	

No.	Question	Working space	Answer										
23.	Write XXIV in ordinary numbers.												
24.	Change 67 to Roman numbers.												
25.	<p>The following graph shows the number of motorcycle accidents in Mjimwema village for a period of four months:</p>  <table><caption>Motorcycle Accidents in Mjimwema Village</caption><thead><tr><th>Month</th><th>Number of motorcycle accidents</th></tr></thead><tbody><tr><td>January</td><td>10</td></tr><tr><td>February</td><td>25</td></tr><tr><td>March</td><td>5</td></tr><tr><td>April</td><td>40</td></tr></tbody></table> <p>Which month was found to have a small number of motorcycle accidents?</p>	Month	Number of motorcycle accidents	January	10	February	25	March	5	April	40		
Month	Number of motorcycle accidents												
January	10												
February	25												
March	5												
April	40												