

Pupil's Assessment Number:.....

THE UNITED REPUBLIC OF TANZANIA
THE NATIONAL EXAMINATIONAL COUNCIL OF TANZANIA
STANDARD FOUR NATIONAL ASSESSMENT

04E

MATHEMATICS

Time: 1:30 Hours

Thursday, 22nd November, 2018 a.m


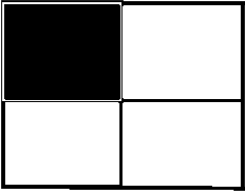
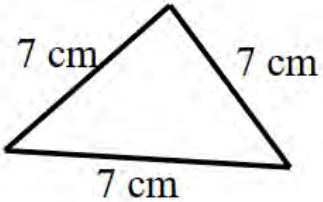
Instructions

1. This paper consists of **five (5)** questions.
2. Answer **all** questions.

FOR ASSESSOR'S USE ONLY		
QUESTION NUMBER	SCORE	ASSESSOR'S INITIALS
1		
2		
3		
4		
5		
TOTAL		
CHECKER'S INITIALS		

No.	Question	Working space	Answer
1. (a)	Write the number 20,392 in words.		
(b)	Write XXXIV in Arabic numbers.		
(c)	Write the place of value of the underlined digit of the number 3 <u>4</u> 02.		
(d)	Write the following number in expanded form: 9536		
(e)	The pupils planted 680 trees so as to conserve the school environment. Write the number of planted trees in words.		
2. (a)	Write the next number in the following sequence of numbers: 1, 3, 5, 7, ____.		
(b)	Arrange the following numbers starting from the smallest to the largest: 20, 4, 12, 7, 16, 3, 10		

No.	Question	Working space	Answer
(c)	Write the missing number to complete the following sequence of Roman numbers: XXII, XXV, XXVIII, ____, XXXIV.		
(d)	Write the missing number in the following sequence: 36, 33, 30, ____, 24.		
(e)	The frog jumped three steps with the same length until it reached 21m. If it jumped the fourth step of the same length as the previous steps, at what distance will it end up?		
3. (a)	Add; $1715 + 263 =$		
(b)	Divide; $20 \overline{) 600}$		
(c)	Mkombozi Primary School has 826 pupils. If the number of boys is 408, how many girls are there?		
(d)	Multiply; $49 \times 53 =$		
(e)	Kijo had 9,750 shillings. He gave his friend some money and remained with 3,250 shillings. How much money did he give his friend?		

No.	Question	Working space	Answer
4. (a)	<p>Write the name of the following figure which has equal length in all of its four sides</p> 		
(b)	<p>The parts shown in the following figure have the same size. Write the fraction of the shaded part.</p> 		
(c)	<p>Find the perimeter of the following figure:</p> 		
(d)	<p>The perimeter of the triangle is 48 cm. If the length of the first side is 12 cm and the length of the second side is 20 cm, find the length of the third side.</p>		
(e)	<p>The rectangle has the perimeter of 80cm and the length of 25 cm. Find its width.</p>		

No.	Question	Working Space	Answer
5. (a)	Add; shs. 1940 + shs. 265=		
(b)	Subtract; shs. 3150 - shs. 1500=		
(c)	Multiply; Shs. 3 0 0 x 2 5 ----- -----		
(d)	Mariamamu had shs. 8,650 in her pocket. Later on, she spent shs. 3,800. How much money did she remain with?		
(e)	How many 1,000 shilling notes are there in 10,000 Tanzanian shilling note?		